

Şekil Sayı Eşleştirme

→
= 7

◇
= 4

□
= 8

△
= 5

⬠
= 0

☆
= 1

▽
= 3

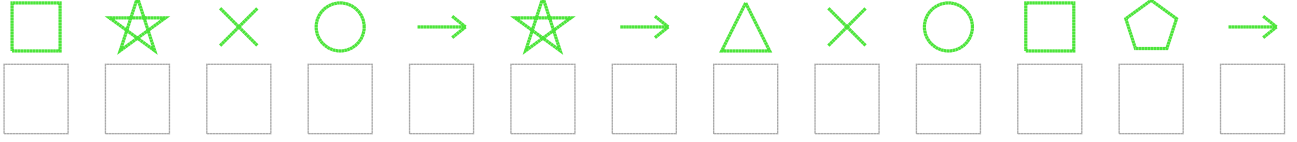
+

×

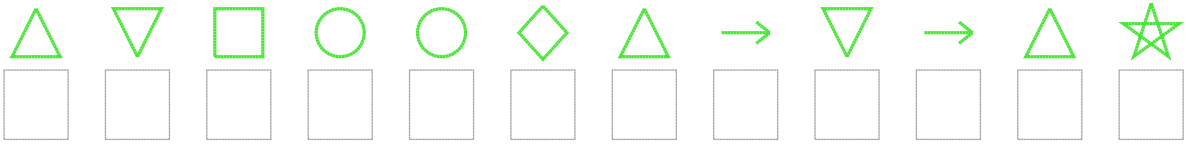
○
= 6

Aşağıdaki uzun şifreleri hatasız çözerek altlarına yazın:

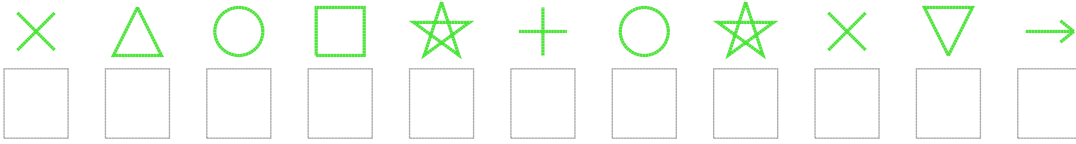
1. Şifre



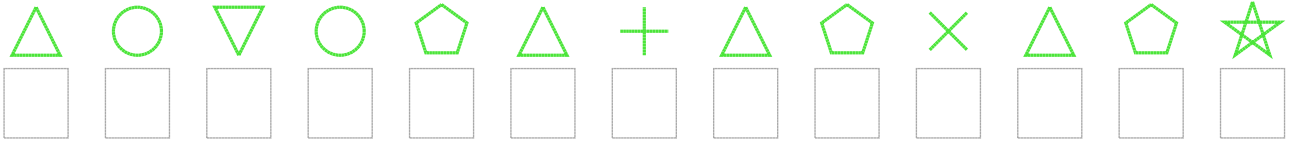
2. Şifre



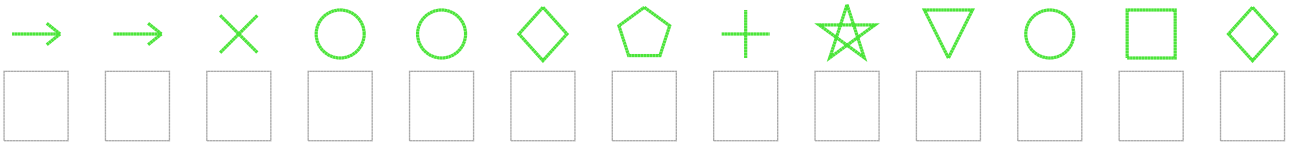
3. Şifre



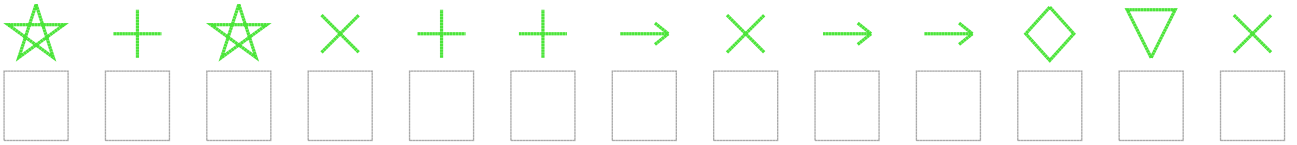
4. Şifre



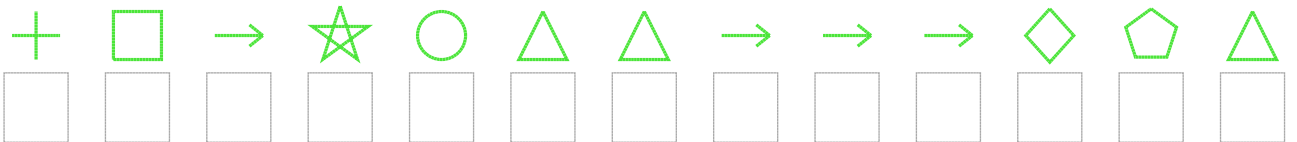
5. Şifre



6. Şifre



7. Şifre



□ BONUS: 6. ve 4. şifrenin ilk rakamının toplamı kaçtır?

Cevap Anahtarı

1. Şifre: 8126717526807

2. Şifre: 538664573751

3. Şifre: 25681961237

4. Şifre: 5636059502501

5. Şifre: 7726640913684

6. Şifre: 1912997277432

7. Şifre: 9871655777405

□ Bonus Soru Cevabı: 6